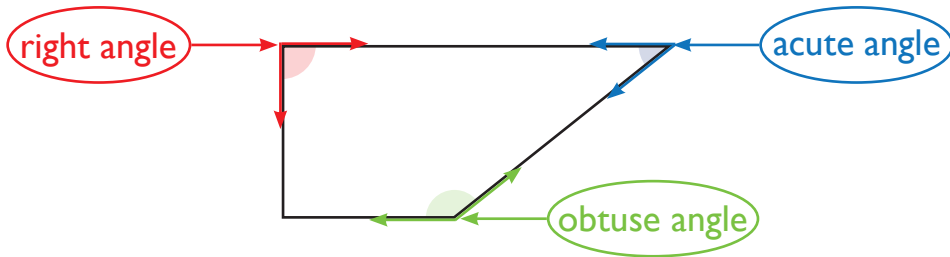


Name _____

Date _____

What's Your Angle?



Write the name of each angle.

1



2




3




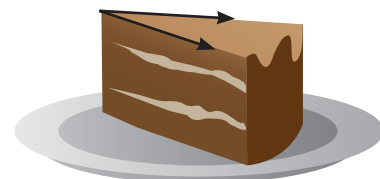
4



Write the name of the marked angle







Count the different kinds of angles in the drawing.
Write how many of each angle you find.

right angle

acute angle

obtuse angle

